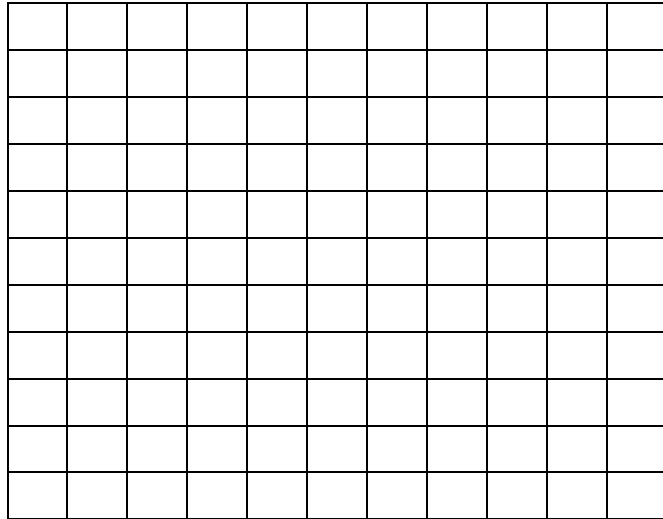


Name: \_\_\_\_\_ Date: \_\_\_\_\_

Review Worksheet  
Version A – Part 5

1. Label the x and y axes from 0 to 9 on the grid below.

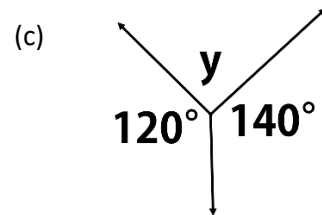
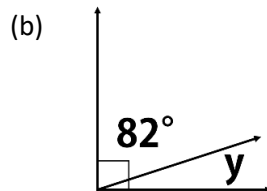
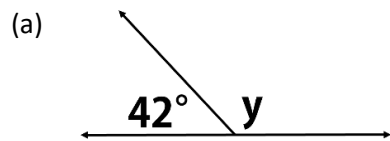


- (a) Plot the following points: A (1, 3)      B (3, 0)      C (6, 0)  
D (8, 3)      E (6, 6)      F (3, 6)

(b) Connect the points in alphabetical order then F-A to form a closed figure.

(c) Give the name of the figure. \_\_\_\_\_

2. Calculate the size of the unknown angles.



3. Write in set notation: (a) 'A' is an empty set \_\_\_\_\_  
(b) fruit is a member of B \_\_\_\_\_

4. State the name of each of the following symbols:

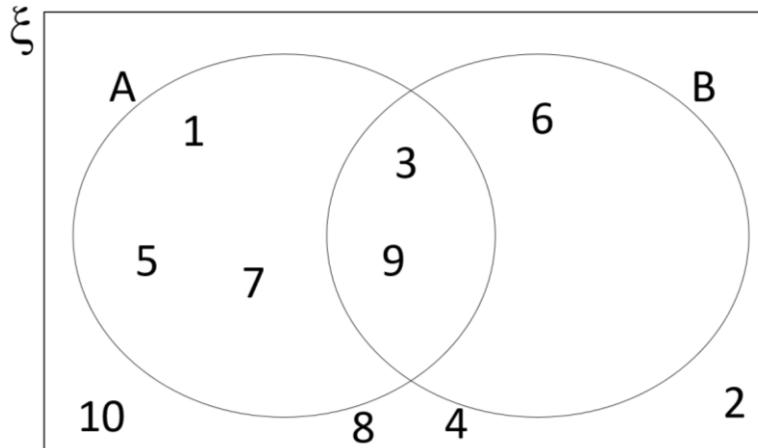
(a)  $\cap$  \_\_\_\_\_

(b)  $\cup$  \_\_\_\_\_

(c) ' \_\_\_\_\_

(d)  $n(A)$  \_\_\_\_\_

5. Use the venn diagram below to answer the questions.



List the members of:

(a)  $A \cup B$  \_\_\_\_\_

(b)  $A \cap B$  \_\_\_\_\_

(c)  $\xi$  \_\_\_\_\_

(d)  $A'$  \_\_\_\_\_