


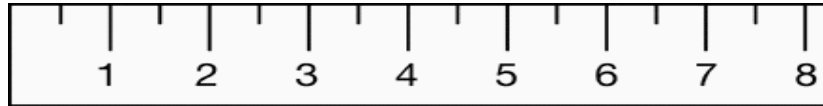
Name: \_\_\_\_\_ Date: \_\_\_\_\_

Review Worksheet  
Version A – Part 3

1. Write down the length of the pencil in cm.



Ans: \_\_\_\_\_ cm



2. Fill in the blank correctly.

(a) 27km = \_\_\_\_\_ m

(b) 70cm = \_\_\_\_\_ mm

(c) 6kg = \_\_\_\_\_ g

(d) 3000g = \_\_\_\_\_ kg

3. (a) Find the L.C.M. of 6 and 9.

- (b) Find the H.C.F. of 12 and 32.

4. (a) Convert  $\frac{3}{4}$  to a decimal.

- (b) Convert  $\frac{16}{5}$  to a mixed number.

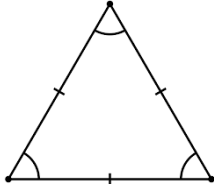
- (c) Convert  $2\frac{3}{7}$  improper fraction.

- (d) Convert  $\frac{2}{5}$  to a percentage.

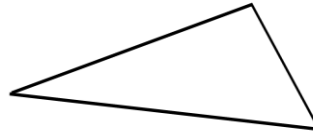
5. From the list of words, name the triangles.

Scalene	Isosceles	Trapezium
Reflex		Equilateral

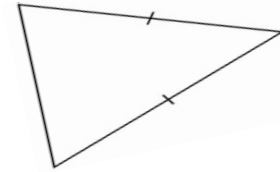
(a)



(b)



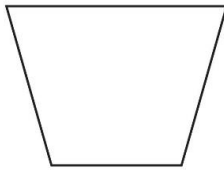
(c)



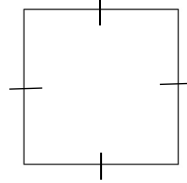
6. From the list of words, name the quadrilaterals.

Square	Rhombus	Trapezium
Parallelogram	Kite	Rectangle

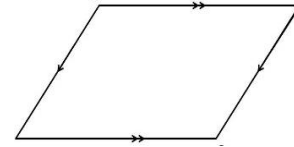
(a)



(b)



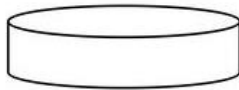
(c)



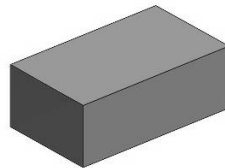
7. From the list of words, name the solids.

Cylinder	Cube	Pyramid
Cone	Sphere	Cuboid

(a)



(b)



(c)

